

# DENBORA-PASAK


## 1.

**Harri-jasotzaileak.** Gogor entrenatu ostean, erakustaldi ederra egin dute Martinek eta Pellok. **Kalkulatu zenbat pisu jaso duen bakoitzak.**




**MARTIN**

.....




7 aldiz



9 aldiz



3 aldiz




8 aldiz




**PELLO**

.....




4 aldiz



5 aldiz



11 aldiz



9 aldiz

## 2.

**Bikiak.** Itsasora egingako bidaia batean, baleak ikusi ditu Inharrek. Bi berdinak ziren. **Zeintzuk dira balea bikiak?**

