













## DENBORA-PASAK



# 1.

**Batuketak.** Gazta lehiaketa jarri duğu martxan. Zein sağuk aurkituko ditu gazta zati gehiago bere ibilbidean?

# 2.

**Zenbakien segida.**

Ehunzangoak zure laguntza behar du eragiketa matematiko bat egiteko. Zein da segida honen hurrengo zenbakia?

**Ez egin tranparik, eta buruz kalkulatu.**

